
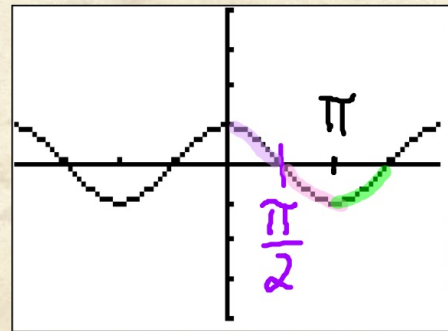
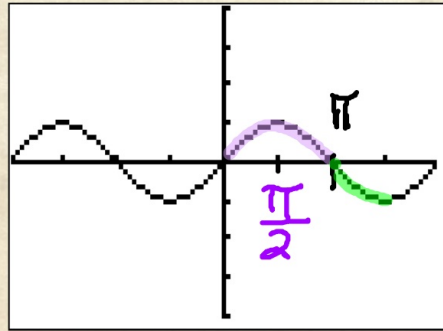


October 17

Use the graphs of **sine** and **cosine** to explain why **tangent** is positive from 0 to $\frac{\pi}{2}$ and negative from $\frac{\pi}{2}$ to π .



October 17

Students will **verbally explain** how to graph all six trig functions
(using the words:
zero, asymptote, undefined...)

Set 3:

pg 178 #2 - 8 (even), 9 - 24 (multiples of 3)