



September 24

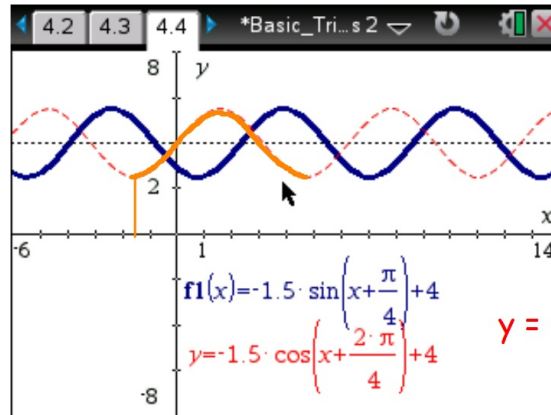
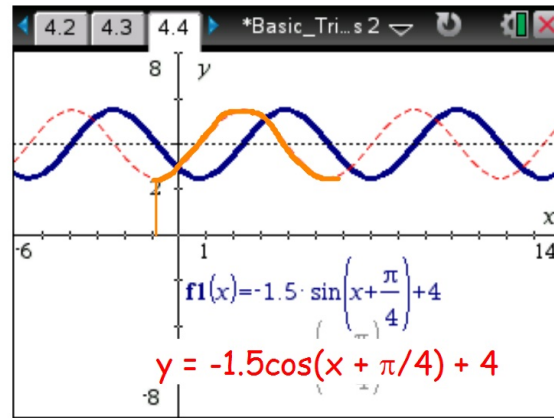
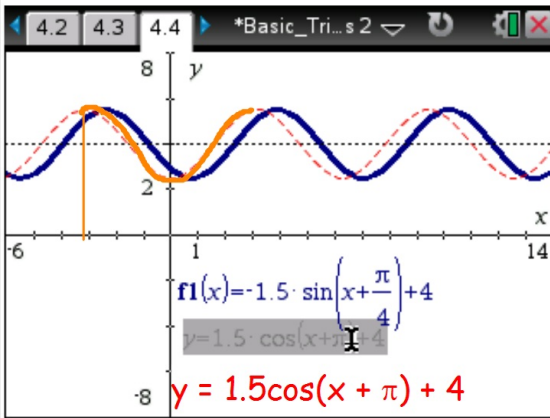
What was the hardest/most unique question you saw on the test this morning?

What was the easiest?

September 24

Students will verbally explain how to graph sine and cosine functions

(using the words:  
range, right triangles, periodic...)



$$y = -1.5 \cos\left(x + \frac{2\pi}{4}\right) + 4$$

